

Chapter 13: Complex Numbers

Sections 13.1 & 13.2

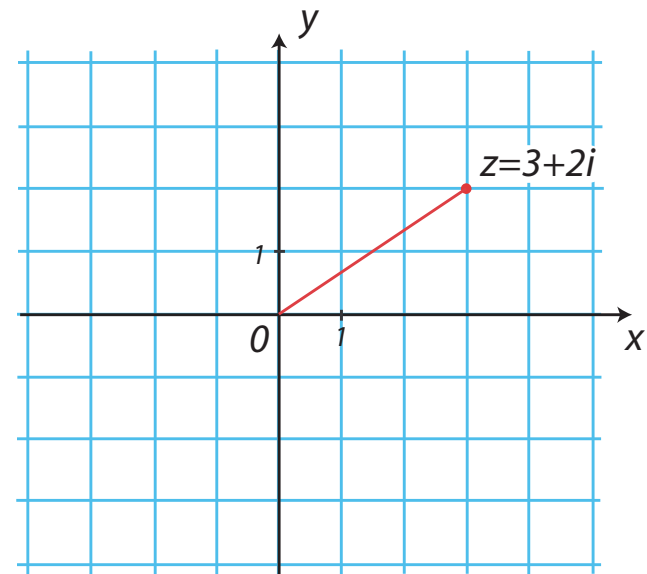
1. Complex numbers

- Complex numbers are of the form

$$z = x + iy, \quad x, y \in \mathbb{R}, \quad i^2 = -1.$$

- In the above definition, x is the **real part** of z and y is the **imaginary part** of z .

- The complex number $z = x + iy$ may be represented in the complex plane as the point with cartesian coordinates (x, y) .



Complex conjugate

- The **complex conjugate** of $z = x + iy$ is defined as

$$\bar{z} = x - iy.$$

- As a consequence of the above definition, we have

$$\Re(z) = \frac{z + \bar{z}}{2}, \quad \Im(z) = \frac{z - \bar{z}}{2i}, \quad z\bar{z} = x^2 + y^2. \quad (1)$$

- If z_1 and z_2 are two complex numbers, then

$$\overline{z_1 + z_2} = \bar{z}_1 + \bar{z}_2, \quad \overline{z_1 z_2} = \bar{z}_1 \bar{z}_2. \quad (2)$$

Modulus of a complex number

- The **absolute value** or **modulus** of $z = x + iy$ is

$$|z| = \sqrt{z\bar{z}} = \sqrt{x^2 + y^2}.$$

It is a **positive number**.

- **Examples:** Evaluate the following
 - $|i|$
 - $|2 - 3i|$

2. Algebra of complex numbers

- You should use **the same rules of algebra as for real numbers**, but remember that $i^2 = -1$.

Examples:

- # 13.1.1: Find powers of i and $1/i$.
 - Assume $z_1 = 2 + 3i$ and $z_2 = -1 - 7i$. Calculate $z_1 z_2$ and $(z_1 + z_2)^2$.
- Get used to writing a complex number in the form

$$z = (\text{real part}) + i (\text{imaginary part}),$$

no matter how complicated this expression might be.

Algebra of complex numbers (continued)

- Remember that **multiplying a complex number by its complex conjugate gives a real number.**
- **Examples:** Assume $z_1 = 2 + 3i$ and $z_2 = -1 - 7i$.
 - Find $\frac{z_1}{z_2}$.
 - Find $\frac{\bar{z}_1}{\bar{z}_2}$.
 - Find $\Im m \left(\frac{1}{z_1^3} \right)$.
 - # 13.2.27: Solve $z^2 - (8 - 5i)z + 40 - 20i = 0$.

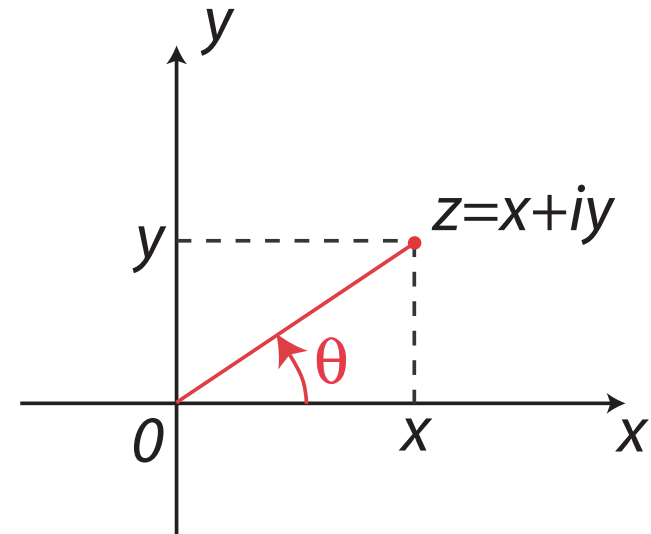
3. Polar coordinates form of complex numbers

- In polar coordinates,

$$x = r \cos(\theta), \quad y = r \sin(\theta),$$

where

$$r = \sqrt{x^2 + y^2} = |z|.$$



- The angle θ is called **the argument of z** . It is defined for all $z \neq 0$, and is given by


$$\arg(z) = \theta = \begin{cases} \arctan\left(\frac{y}{x}\right) & \text{if } x \geq 0 \\ \arctan\left(\frac{y}{x}\right) + \pi & \text{if } x < 0 \text{ and } y \geq 0 \\ \arctan\left(\frac{y}{x}\right) - \pi & \text{if } x < 0 \text{ and } y < 0 \end{cases} \pm 2n\pi.$$

Principal value $\text{Arg}(z)$

- Because $\text{arg}(z)$ is multi-valued, it is convenient to agree on a particular choice of $\text{arg}(z)$, in order to have a single-valued function.
- The **principal value** of $\text{arg}(z)$, $\text{Arg}(z)$, is such that

$$\tan(\text{Arg}(z)) = \frac{y}{x}, \quad \text{with } -\pi < \text{Arg}(z) \leq \pi.$$

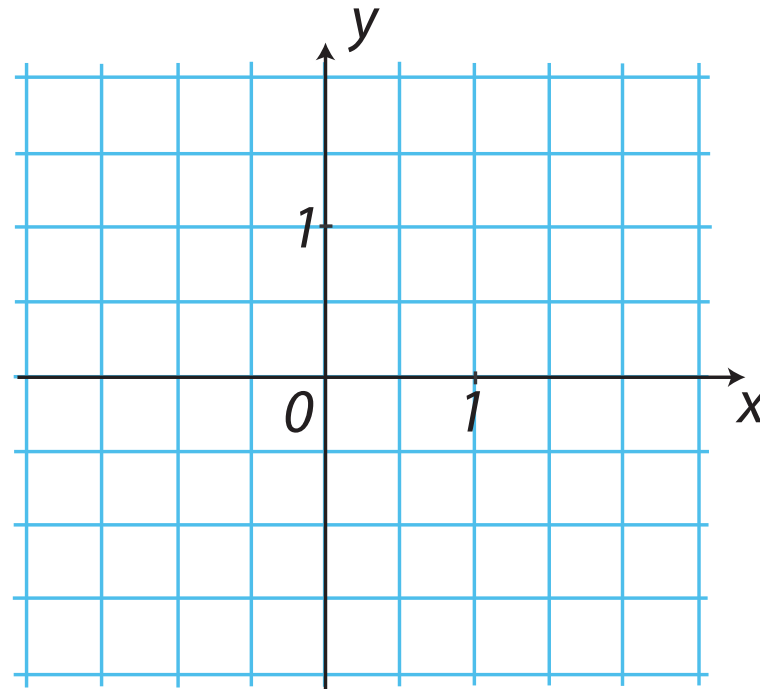
- Note that $\text{Arg}(z)$ jumps by -2π when one crosses the negative real axis from above.



Principal value $\text{Arg}(z)$ (continued)

- **Examples:**

- Find the principal value of the argument of $z = 1 - i$.
- Find the principal value of the argument of $z = -10$.



Polar and cartesian forms of a complex number

- You need to be able to go back and forth between the polar and cartesian representations of a complex number.

$$z = x + iy = |z| \cos(\theta) + i|z| \sin(\theta).$$

- In particular, you need to know the values of the sine and cosine of multiples of $\pi/6$ and $\pi/4$.
 - Convert $\cos\left(\frac{\pi}{6}\right) + i \sin\left(\frac{\pi}{6}\right)$ to cartesian coordinates.
 - What is the cartesian form of the complex number such that $|z| = 3$ and $\text{Arg}(z) = \pi/4$?

Euler's formula

- Euler's formula reads

$$\exp(i\theta) = \cos(\theta) + i \sin(\theta), \quad \theta \in \mathbb{R}.$$

- As a consequence, every complex number $z \neq 0$ can be written as

$$z = |z| (\cos(\theta) + i \sin(\theta)) = |z| \exp(i\theta).$$

- This formula is extremely useful for calculating powers and roots of complex numbers, or for multiplying and dividing complex numbers in polar form.

Integer powers of a complex number

To find the n -th power of a complex number $z \neq 0$, proceed as follows

- 1 Write z in exponential form,

$$z = |z| \exp(i\theta).$$

- 2 Then take the n -th power of each side of the above equation

$$z^n = |z|^n \exp(in\theta) = |z|^n (\cos(n\theta) + i \sin(n\theta)).$$

- 3 In particular, if z is on the unit circle ($|z| = 1$), we have

$$(\cos(\theta) + i \sin(\theta))^n = \cos(n\theta) + i \sin(n\theta).$$

This is **De Moivre's formula**.

Integer powers of a complex number (continued)

- **Examples of application:**
 - Trigonometric formulas

$$\begin{cases} \cos(2\theta) = \cos^2(\theta) - \sin^2(\theta), \\ \sin(2\theta) = 2 \sin(\theta) \cos(\theta). \end{cases} \quad (3)$$

- Find $\cos(3\theta)$ and $\sin(3\theta)$ in terms of $\cos(\theta)$ and $\sin(\theta)$.

Product of two complex numbers

- The **product** of $z_1 = r_1 \exp(i\theta_1)$ and $z_2 = r_2 \exp(i\theta_2)$ is

$$\begin{aligned} z_1 z_2 &= (r_1 \exp(i\theta_1)) (r_2 \exp(i\theta_2)) \\ &= r_1 r_2 \exp(i(\theta_1 + \theta_2)). \end{aligned} \tag{4}$$

- As a consequence,

$$\arg(z_1 z_2) = \arg(z_1) + \arg(z_2), \quad |z_1 z_2| = |z_1| |z_2|.$$

- We can use Equation (4) to show that

$$\begin{aligned} \cos(\theta_1 + \theta_2) &= \cos(\theta_1) \cos(\theta_2) - \sin(\theta_1) \sin(\theta_2), \\ \sin(\theta_1 + \theta_2) &= \sin(\theta_1) \cos(\theta_2) + \cos(\theta_1) \sin(\theta_2). \end{aligned} \tag{5}$$

Ratio of two complex numbers

- Similarly, the **ratio** $\frac{z_1}{z_2}$ is given by

$$\frac{z_1}{z_2} = \frac{r_1 \exp(i\theta_1)}{r_2 \exp(i\theta_2)} = \frac{r_1}{r_2} \exp(i(\theta_1 - \theta_2)).$$

- As a consequence,

$$\arg\left(\frac{z_1}{z_2}\right) = \arg(z_1) - \arg(z_2), \quad \left|\frac{z_1}{z_2}\right| = \frac{|z_1|}{|z_2|}.$$

- **Example:** Assume $z_1 = 2 + 3i$ and $z_2 = -1 - 7i$. Find $\left|\frac{z_1}{z_2}\right|$.

Roots of a complex number

To find the n -th roots of a complex number $z \neq 0$, proceed as follows

- 1 Write z in exponential form,

$$z = r \exp(i(\theta + 2p\pi)),$$

with $r = |z|$ and $p \in \mathbb{Z}$.

- 2 Then take the n -th root (or the $1/n$ -th power)

$$\sqrt[n]{z} = z^{1/n} = r^{1/n} \exp\left(i\frac{\theta + 2p\pi}{n}\right) = \sqrt[n]{r} \exp\left(i\frac{\theta + 2p\pi}{n}\right).$$

- 3 There are thus n roots of z , given by

$$z_k = \sqrt[n]{r} \left(\cos\left(\frac{\theta + 2k\pi}{n}\right) + i \sin\left(\frac{\theta + 2k\pi}{n}\right) \right), \quad k = 0, \dots, n-1.$$

Roots of a complex number (continued)

- The **principal value** of $\sqrt[n]{z}$ is the n -th root of z obtained by taking $\theta = \text{Arg}(z)$ and $k = 0$.
- The n -th roots of unity are given by

$$\sqrt[n]{1} = \cos\left(\frac{2k\pi}{n}\right) + i \sin\left(\frac{2k\pi}{n}\right) = \omega^k, \quad k = 0, \dots, n-1$$

where $\omega = \cos(2\pi/n) + i \sin(2\pi/n)$.

- In particular, if w_1 is any n -th root of $z \neq 0$, then the n -th roots of z are given by

$$w_1, w_1\omega, w_1\omega^2, \dots, w_1\omega^{n-1}.$$

Roots of a complex number (continued)

- **Examples:**
 - Find the three cubic roots of 1.
 - Find the four values of $\sqrt[4]{i}$.
 - Give a representation in the complex plane of the principal value of the eighth root of $z = -3 + 4i$.

Triangle inequality

- If z_1 and z_2 are two complex numbers, then

$$|z_1 + z_2| \leq |z_1| + |z_2|.$$

This is called the **triangle inequality**. Geometrically, it says that the length of any side of a triangle cannot be larger than the sum of the lengths of the other two sides.

- More generally, if z_1, z_2, \dots, z_n are n complex numbers, then

$$|z_1 + z_2 + \cdots + z_n| \leq |z_1| + |z_2| + \cdots + |z_n|.$$