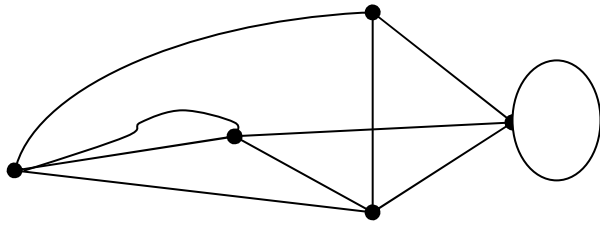


Graph: Describe the following graph.



Which of the following are graphs? If it is a graph, describe it. If it is not a graph, state why.

1.



2.



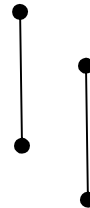
3.



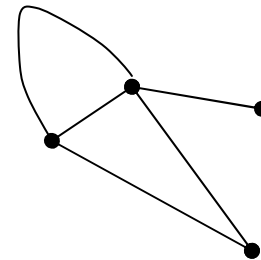
4.



5.



6.



Which ones are connected graphs?

Which ones are disconnected graphs?